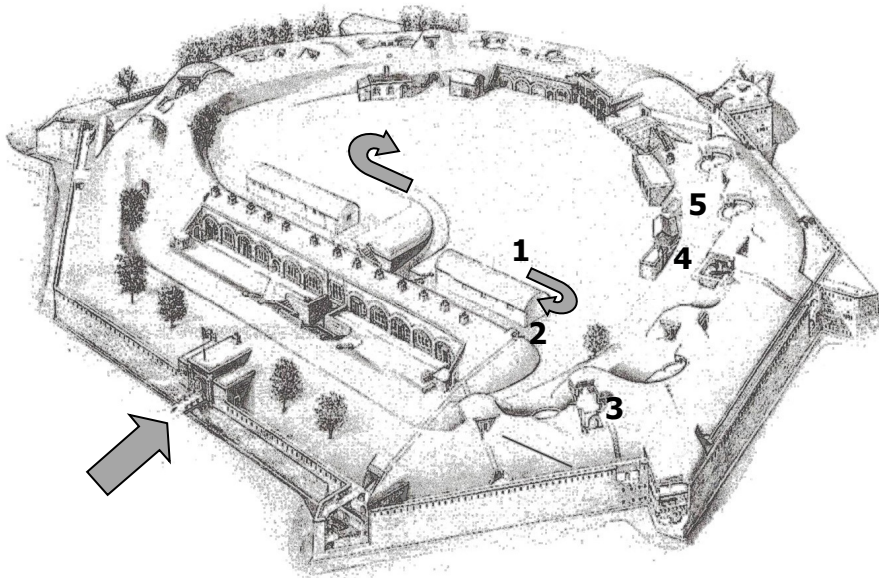




**YOUR NAME**

Start the trail following the grey arrows  
Follow the numbers from 1-11.



**1 THE GUN SHED**

What were the Light Guns on carriages used for?

---



---

What was out of date by 1872?

---



---

(See the information notice on the end of the building)

**2 LIGHTING**

Look at the light over the doorway. What kind of light would have been here when the Fort was first built? (Tick your answer.)

Electric  Gas  Oil  Candle

Draw the frame holding the light here.

**3 TREE**

This tree is growing on the roof of the gun emplacement.



What sort of tree is it?

Lime  Oak

Beech

What else grows on the tree apart from leaves?

A \_ \_ \_ \_ \_

(Here is a clue)



**4 DOUBLE HAXO CASEMATE**



Who was the inventor of the gun?

W \_ \_ \_ \_ \_ A \_ \_ \_ \_ \_

What was he the first man to have in his home?


E \_ \_ \_ \_ \_ L \_ \_ \_ \_ \_

What was the sheepskin on the long pole used for?

---

**5 MONCRIEFF GUN**

This gun does something special.



What is it?

How did it help the gunners?

How heavy was the shell the gun fired?

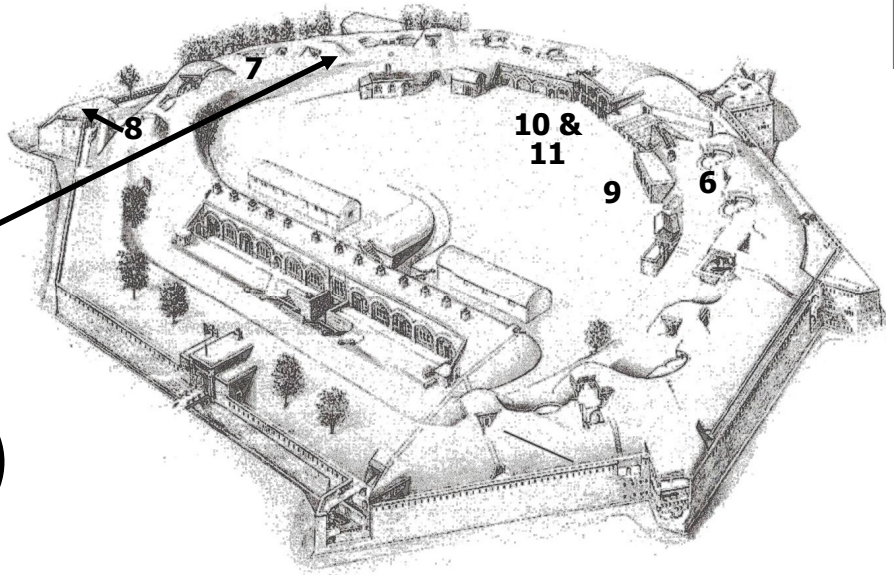
---



There are three of these rough-cast objects on the ramparts dating from World War II, but no one knows what they were for. What would be your guess?

\_\_\_\_\_

\_\_\_\_\_



### 6 C-PIVOT GUN

What is the date on this gun? \_\_\_\_\_

What type of gun is it? C \_ N \_ \_ \_

Draw the gun on its carriage here.

### 7 MAGAZINE

Go down the steps and **mind your head!**

What do you think was kept in this building?

G \_ \_ P \_ \_ \_ \_ \_



This space had a glass window on the inside and an oil lamp stood here. Why do you think there was a glass window? Think about what was stored in here.

\_\_\_\_\_

### 8 TRIANGULATION PILLAR


**HAZARD — DO NOT CLIMB UP TO THIS OBJECT!**

What was it used for?

Map making

A lookout post

A gun mounting



Why do you think this pillar was set so high?

\_\_\_\_\_

### 9 2-inch FIELD GUN

What is needed to make this gun fire?

(Remember what was stored in the Magazine.)

What might have been kept in the two small boxes beside the barrel?

F U \_ \_ S



This is called a tampion. What do you think it was used for?

\_\_\_\_\_



### 10 1890 BARRACK ROOM



This is a mangle. What was it used for?

\_\_\_\_\_

Name three things that each man had.

\_\_\_\_\_

\_\_\_\_\_

### 11 1944 BARRACK ROOM

What army unit did these soldiers belong to?

R \_ \_ \_ A \_  
(Look at the shoulder badges on the jackets)

Draw the badge that is on the sleeve of the battledress jacket.